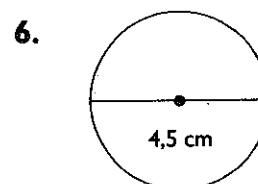
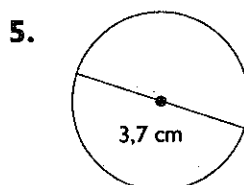
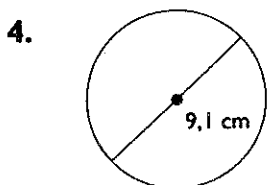
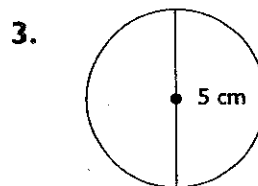
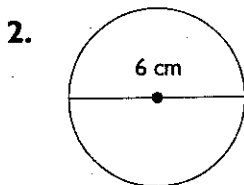
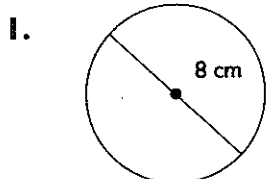


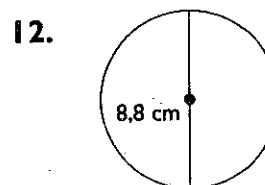
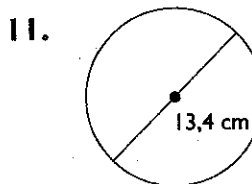
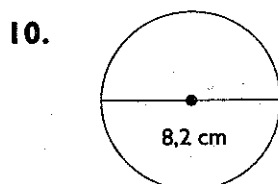
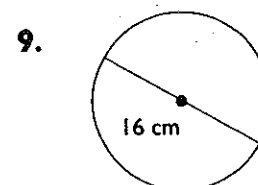
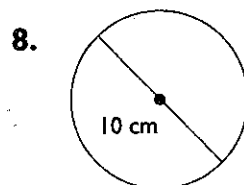
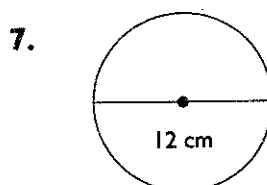
Trouver une circonférence

10.12 Les propriétés des cercles

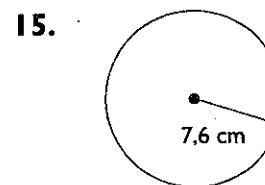
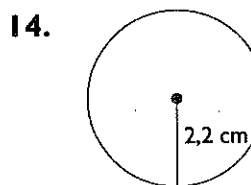
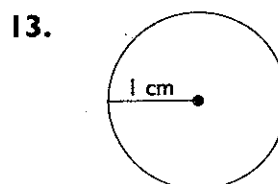
Estime la circonférence de chaque cercle, puis calcule-la au dixième de centimètre près.



Quelle est la mesure du rayon de chaque cercle?



Calcule la circonférence au dixième de centimètre près.



Trouve la circonférence de chaque cercle au dixième près.

16. $r = 3,9$ cm

17. $r = 14$ mm

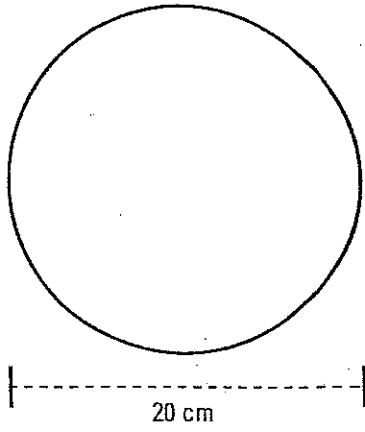
18. $r = 4,1$ m

19. $r = 8,1$ cm

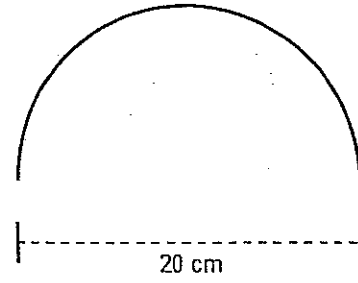
20. 3,9 mm

Déterminez la circonférence, le périmètre ou la longueur des figures suivantes. Arrondissez les réponses au centième près.

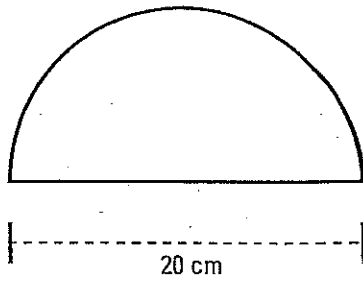
a)



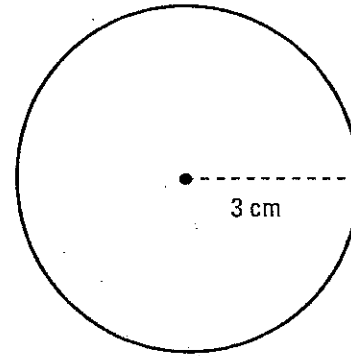
b)



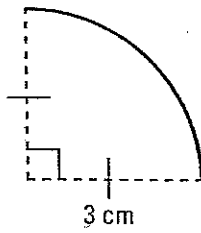
c)



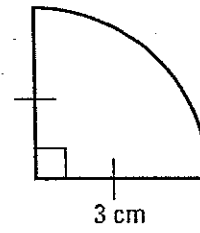
d)



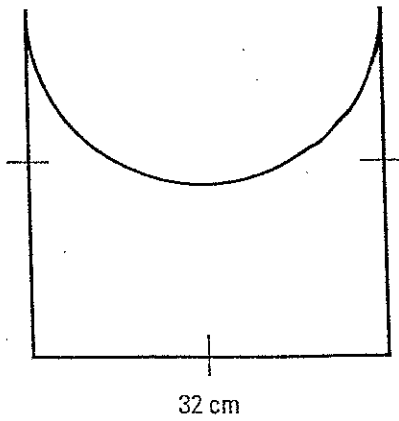
e)



f)



g)



h)

